


答：还剩（ ）辆客车。

答：小林这队一共有（ ）个小朋友。



1、凑十法

$$\begin{array}{r} 7+5=12 \\ \begin{array}{l} \diagdown \quad \diagup \\ 3 \quad 2 \\ \hline 10 \end{array} \end{array}$$

$$\begin{array}{r} 7+8=15 \\ \begin{array}{l} \diagdown \quad \diagup \\ 3 \quad 5 \\ \hline 10 \end{array} \end{array}$$

凑十法练习题

$$9 + 6 = \square$$

$$9 + 5 = \square$$

$$9 + 4 = \square$$

$$9 + 3 = \square$$

$$9 + 2 = \square$$

$$9 + 7 = \square$$

$$7 + 8 = \square$$

$$7 + 7 = \square$$

$$7 + 9 = \square$$

$$7 + 4 = \square$$

$$7 + 5 = \square$$

$$7 + 6 = \square$$

$$6 + 9 = \square$$

$$6 + 8 = \square$$

$$6 + 7 = \square$$

$$6 + 6 = \square$$

$$6 + 5 = \square$$

$$5 + 9 = \square$$

$$5 + 8 = \square$$

$$5 + 7 = \square$$

$$5 + 6 = \square$$

$$4 + 9 = \square$$

$$4 + 8 = \square$$

$$4 + 7 = \square$$

$$3 + 9 = \square$$

$$3 + 8 = \square$$

$$2 + 9 = \square$$

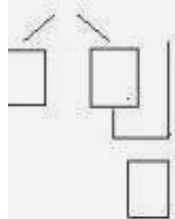
$$12 - 9 = 3$$

先算: $10 - 9 = 1$

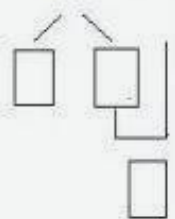
再算: $2 + 1 = 3$

破十法练习题

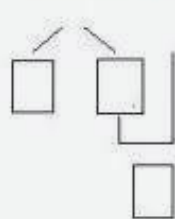
$18 - 9 =$



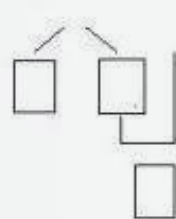
$17 - 9 =$



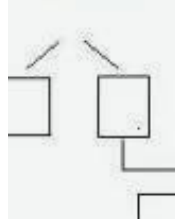
$16 - 9 =$



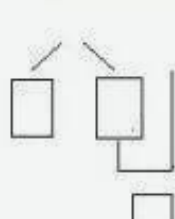
$15 - 9 =$



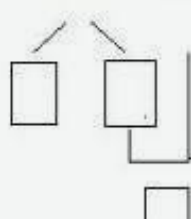
$14 - 9 =$



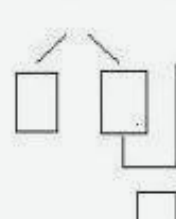
$13 - 9 =$



$12 - 9 =$



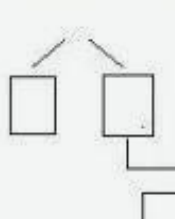
$11 - 9 =$



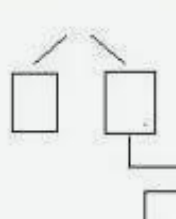
$17 - 8 =$



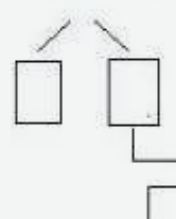
$16 - 8 =$



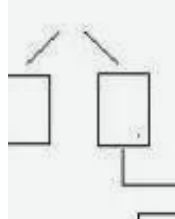
$15 - 8 =$



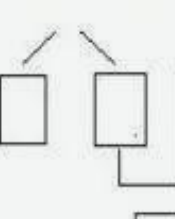
$14 - 8 =$



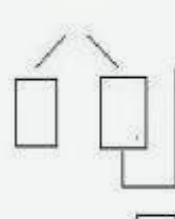
$13 - 8 =$



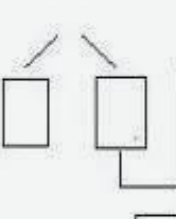
$12 - 8 =$



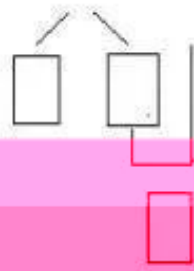
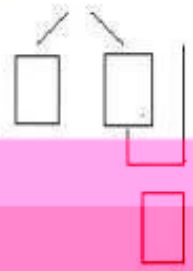
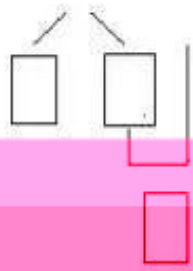
$11 - 8 =$



$16 - 7 =$



$15 - 7 =$ $14 - 7 =$ $13 - 7 =$ $12 - 7 =$

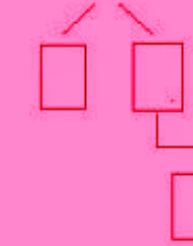
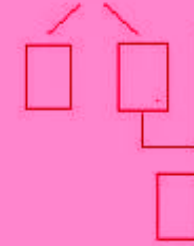
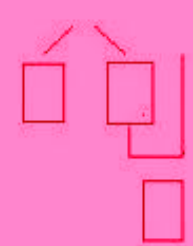
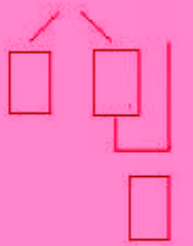


$11 - 7 =$

$15 - 6 =$

$14 - 6 =$

$13 - 6 =$

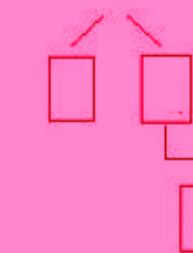
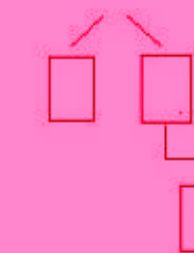
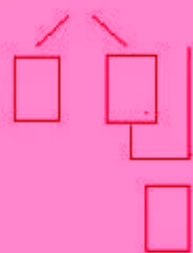
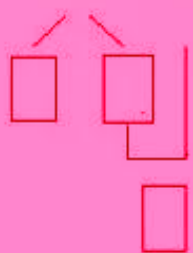


$12 - 6 =$

$11 - 6 =$

$14 - 5 =$

$13 - 5 =$

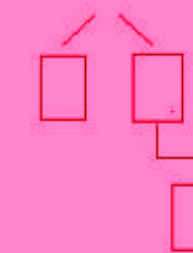
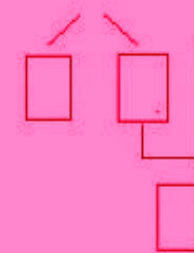
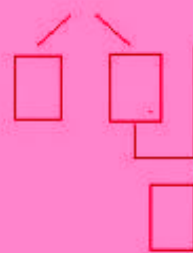
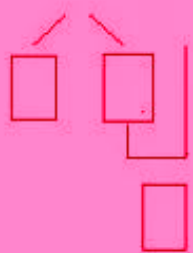


$12 - 5 =$

$11 - 5 =$

$13 - 4 =$

$12 - 4 =$



$11 - 4 =$

$12 - 3 =$

$11 - 3 =$

$11 - 2 =$

